

Aluno(a): _____

Curso: Infantil

Professora: Valéria _____

Data: 28/07/2020 _____

Coord^a.: Ana Carla _____

MINHA TAREFINHA DE CASA

1ª- Vamos contar ?

$$\text{Hand with 4 fingers} + \text{Hand with 2 fingers} = \square + \square = \square$$

$$\text{Hand with 2 fingers} + \text{Hand with 4 fingers} = \square + \square = \square$$


$$\text{Hand with 2 fingers} + \text{Hand with 3 fingers} = \square + \square = \square$$

$$\text{Hand with 4 fingers} + \text{Hand with 3 fingers} = \square + \square = \square$$

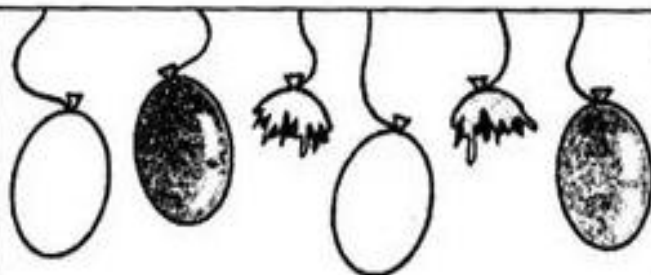
$$\text{Hand with 3 fingers} + \text{Hand with 2 fingers} = \square + \square = \square$$

$$\text{Hand with 2 fingers} + \text{Hand with 2 fingers} = \square + \square = \square$$


2ª- Vamos subtrair?



$$7 - 1 = \square$$




$$6 - 2 = \square$$



$$9 - 2 = \square$$



$$9 - 4 = \square$$




$$7 - 4 = \square$$




$$5 - 2 = \square$$

3ª- Observe os sinais e resolva as continhas.




$$\underline{\quad} + 5 = \underline{\quad}$$




$$4 + \underline{\quad} = \underline{\quad}$$




$$4 + \underline{\quad} = \underline{\quad}$$



$$2 + \underline{\quad} = \underline{\quad}$$



$$10 - 2 = \underline{\quad}$$



$$9 - 3 = \underline{\quad}$$



$$6 - 4 = \underline{\quad}$$



$$8 - 3 = \underline{\quad}$$

